

Subtract 1000 and 10,000 Answer sheet

- 1 Tim has \$1000. He buys a camera that costs \$425. How much money does Tim have left?



A: 575


- 3 On the 23rd June 2010, 10000 people visited the Eiffel Tower. 7359 between 9 am and 3 pm. How many visited 3 pm until 9 pm closing time?



9 am - 3 pm 7359 visited
3 pm - 9 pm ???? visited

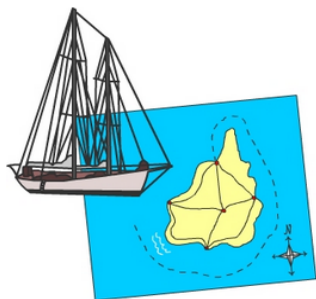
A: 2641

- 5 In a crowd of 10000 people there are 652 children. If the rest are adults, how many adults in the crowd?




A: 9348

- 7 The sailor has completed 947 km of a 1000 km journey. How far does the sailor have left in her journey?



A: 53

- 9 There are 1000 students at Kent School. 648 are girls. How many boys at Kent School?



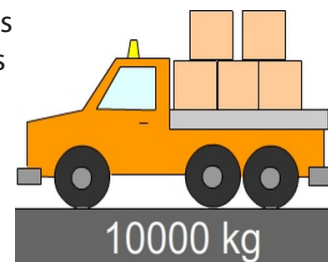
A: 352

- 2 Joe has \$10000 in his wallet. After purchasing a car for \$8495, how much money does Joe have left in his wallet?



A: 1505

- 4 The combined weight of the vehicle and boxes is 10000 kg. If the boxes weigh 2759 kg, what's the weight of the vehicle?



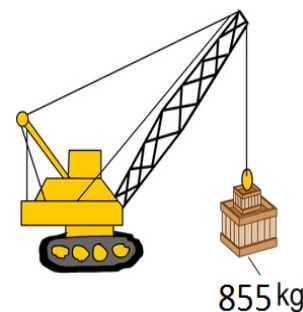
A: 7241

- 6 To reach his sales target Abdul needs to sell 1000 cars. So far he's sold 548. How many more cars does Abdul need to sell to reach his target?



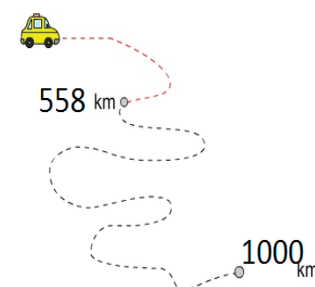
A: 452

- 8 The total weight of both crates is 1000 kg. If the larger crate weighs 855 kg, how much does the smaller crate weigh?



A: 145

- 10 Jenny has driven 558 km out of her 1000 km drive. How far has she left to drive?



A: 442