


Name: _____

Buying Fruit and Vegetables

Shown are the prices for fruit and vegetables at a local store.



CAPSICUMS
3 for \$2




BEETROOT
80c each



CORN
\$1.20 each



CUCUMBERS
3 for \$2.70



POTATOES
\$3.60/kg



PUMPKINS
\$4.50 each




CARROTS
5 for \$3

- 1) Sally bought 3 capsicums and 5 carrots. How much did Sally spend?
- 2) What is the cost of 6 capsicums?
- 3) Harry bought 2 pumpkins. How much change did Harry receive from \$20?
- 4) Three cucumbers cost \$2.70. What does each cucumber cost?
- 5) Mia bought 6 capsicums, 6 cucumbers and 10 carrots. How much did Mia spend?
6 capsicums: _____
6 cucumbers: _____ total cost: _____
10 carrots: _____
- 6) Liam bought some corn and some beetroot. If Liam spent \$7.60, how many of each did Liam buy?

- 7) What is the cost of 3 kilograms of potatoes?
- 8) Andrew bought 3 kilograms of potatoes, 10 carrots, 2 cucumbers and a pumpkin. How much did Andrew spend?
3 kilograms of potatoes: _____
10 carrots: _____ total cost: _____
3 cucumbers: _____
1 pumpkin: _____

Buying Fruit and Vegetables

Shown are the prices for fruit and vegetables at a local store.



CAPSICUMS
3 for \$2



BEETROOT
80c each



POTATOES
\$3.60/kg



CORN
\$1.20 each



CUCUMBERS
3 for \$2.70



PUMPKINS
\$4.50 each



CARROTS
5 for \$3

- 1) Sally bought 3 capsicums and 5 carrots. How much did Sally spend? **\$5**
- 2) What is the cost of 6 capsicums? **\$4**
- 3) Harry bought 2 pumpkins. How much change did Harry receive from \$20? **\$11**
- 4) Three cucumbers cost \$2.70. What does each cucumber cost? **90c**
- 5) Mia bought 6 capsicums, 6 cucumbers and 10 carrots. How much did Mia spend?

6 capsicums: **\$4**

6 cucumbers: **\$5.40**

10 carrots: **\$6**

total cost: **\$15.40**

- 6) Liam bought some corn and some beetroot. If Liam spent \$7.60, how many of each did Liam buy?

 3 x corn (\$3.60)

 5 x beetroot (\$4)

- 7) What is the cost of 3 kilograms of potatoes? **\$10.80**

- 8) Andrew bought 3 kilograms of potatoes, 10 carrots, 2 cucumbers and a pumpkin.
How much did Andrew spend?

3 kilograms of potatoes: **\$10.80**

10 carrots: **\$6**

3 cucumbers: **\$2.70**

1 pumpkin: **\$4.50**

total cost: **\$24**