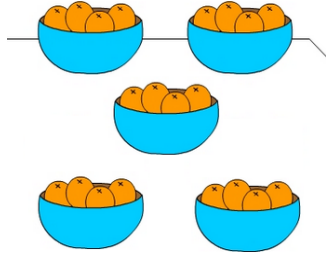



Two digit Division problems - no remainders Activity 1

- 1 Five bowls of oranges are placed on a table. Each bowl contains 24 oranges. How many oranges in each bowl?



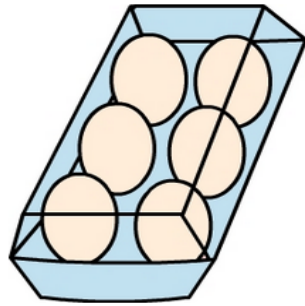
A:

- 3 18 cupcakes are packed into boxes. Each box has 6 cupcakes. How many boxes of cupcakes are there?



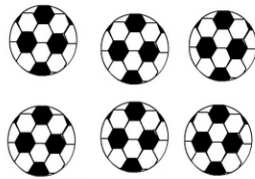
A:

- 5 Kim has 48 eggs. She puts 6 eggs in each carton as shown in the picture. How many cartons does Kim need to place all the eggs in a carton?



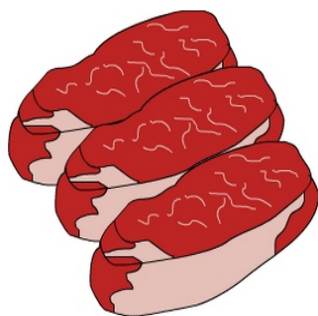
A:

- 7 Six balls cost \$24. What's the cost of two balls?




A:

- 9 Casey bought 6 kg of meat for \$36. How much did Casey pay per kilogram?



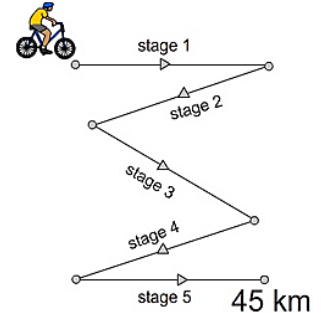
A:

- 2 42 sticks are used to make 6 identical 2D shapes. What's the name of the 2D shape made?



A:

- 4 The 45 km course shown has 5 stages. Each stage is the same distance. How long is each stage?



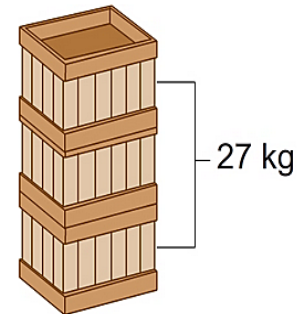
A:

- 6 Henry worked a total of 44 hours from Monday to Thursday (4 days). He worked the same number of hours each day. How many hours did he work on Wednesday?



A:

- 8 The combined weight of 3 identical crates is 27 kg. What does each crate weigh?



A:

- 10 Share 18 sweets equally between 3 children. How many sweets will each child get?



A: