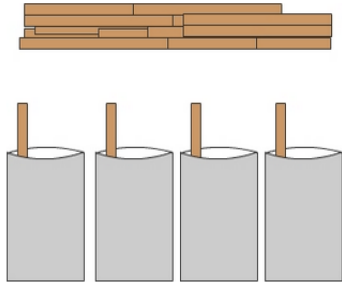


- 1 When 39 sticks are shared equally among 4 tins there are some sticks left over. How many sticks are left over?



A:

- 3 Tom wants to share 76 sweets with 7 of his friends. How many sweets each person get and the amount of sweets remaining?



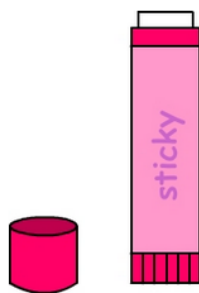
A:

- 5 47 cards are dealt to 6 players. Each receives the same number of cards with the remainder kept by the dealer. How many cards does the dealer keep?



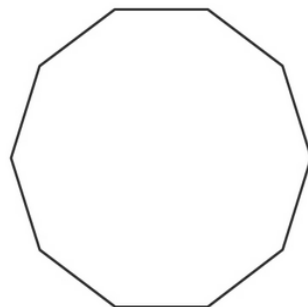
A:

- 7 63 glue sticks are purchased for 6 classes and the office staff. Each class receives 10 glue sticks. How many glue sticks are given to the office staff?



A:

- 9 A decagon is a ten sided shape. How many decagons can be made using 84 sticks and how many sticks will remain unused?



A:

- 2 If you try to share 49 coins between 9 people, each person receives 5 coins with some coins left over. How many coins are left over?



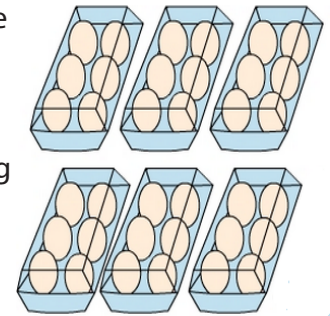
A:

- 4 Julie wants to share 37 chocolate bars between 8 people. Work out how many each person gets and the amount remaining?



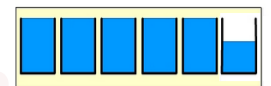
A:

- 6 Magda has 36 eggs. She wants to make 7 cakes. Each cakes needs 5 eggs. How many eggs will remain after making 7 cakes??



A:

- 8 ALL the water from a 33 L drum is poured into 5 equal containers filling them. The remainder of the water is poured into a 6th container. How much water is in the 6th container?



A:

- 10 88 children play musical mats. 9 children can stand on a mat at one time. How many children miss out on a mat the first time? There are 9 mats.



A: