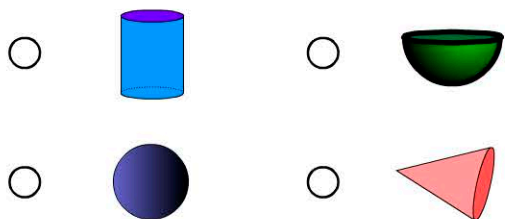


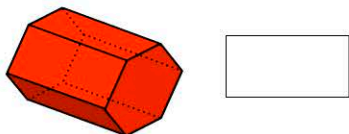
Name:

Date:

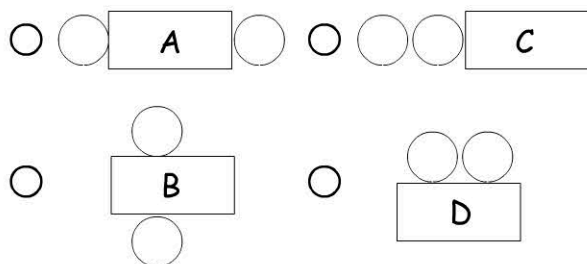
1. Which object is a sphere?



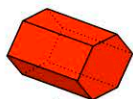

2. How many faces does this object have?



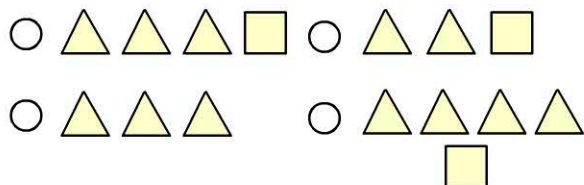
3. Which net is used to make a cylinder?



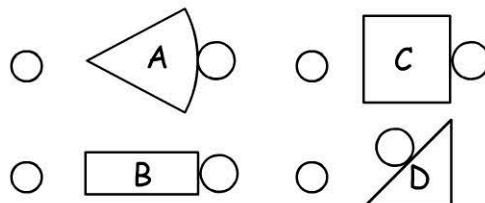
4. Name this object.



5. Which 2D shapes are needed to make a pyramid?



6. Which of these nets can be made into a cone?



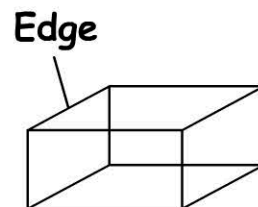
7. What object am I? A sphere that has been cut in half.



8. How many faces does a triangular prism have?



9. This object has 12 edges.



How many edges does a cube have?



10. How many circles are needed to make this object?

