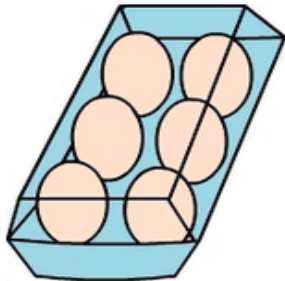


Single digit subtraction

- 1 Olga bought 6 eggs. After using 4 eggs to bake a cake, how many eggs does Olga have left?



A:

- 3 I had 2 coins. After spending 1 coin, how many coins do I have left?



A:

- 5 There are 10 strawberries in a bowl. After eating 7 strawberries, how many strawberries left?



A:

- 7 There are 4 cookies on a plate. After eating 1 cookie, how many cookies are left?



A:

- 9 Dr Sue treated 6 children. 3 were boys. How many girls did she treat?



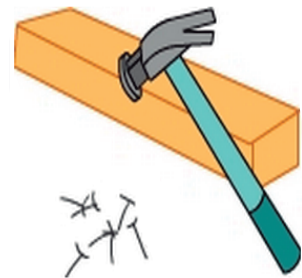
A:

- 2 In my reading group there are 8 children, three of which are girls. How many boys in my reading group?



A:

- 4 Sam had 7 nails. He hammered 4 nails into a block of wood. How many nails does Sam have left?



A:

- 6 My mum and I inflated 8 balloons altogether. If I inflated 7 balloons, how many balloons did my mum inflate?



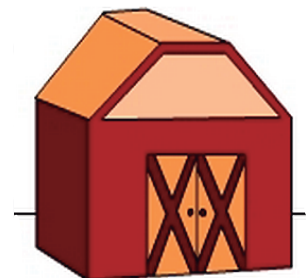
A:

- 8 Fred has 3 candy sticks. After eating 1, how many candy sticks does Fred have left?



A:

- 10 There are 8 horses in the barn. After 6 escape, how many horses left in the barn?



A: