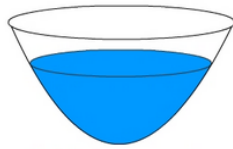


- 1 The total cost of 4 bikes is \$240. What's the cost of one bike?



A:

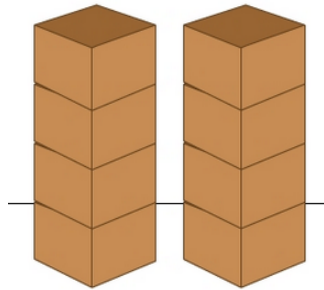
- 3 4 full glasses of water are poured into a bowl. The amount of water in the bowl is 2612 mL. How much water can each glass hold when full?



2612 mL

A:

- 5 The combined weight of 8 boxed, identical items is 544 kg. What's the weight of each box?




A:

- 7 The cyclist completed 8 laps of the course riding a total distance of 472 km. How long is each lap?



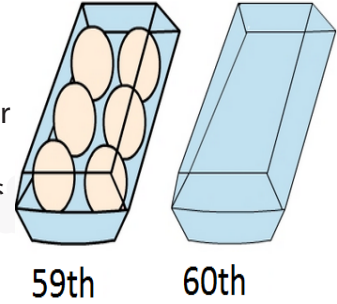
A:

- 9 The total cost of a shared meal between 6 people is \$384. If the bill is split equally, how much does each person pay?



A:

- 2 There are 357 eggs to put into half dozen cartons. 59 cartons are filled and the remainder placed in the 60th carton. How many eggs in the 60th carton?



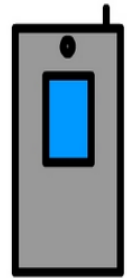
A:

- 4 Carol borrowed \$1518 to buy a car. She needs to repay the amount in six, equal monthly payments. How much is each monthly payment?



A:

- 6 Phone plan: \$729 for 9 months. The cost each month is the same. What is the monthly cost?



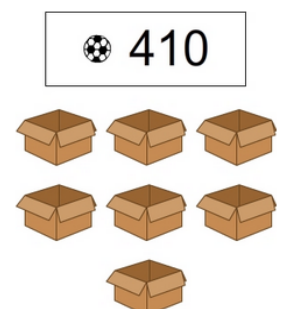
A:

- 8 420 cupcakes have been made for the fundraiser. The cupcakes need to be placed seven per plate. How many plates are needed?



A:

- 10 There are 410 balls. If you try to share an equal number of balls between each box there will be some left over. How many balls will be left over?



A: