




1) Draw the eight phases of the moon.




new moon




waxing crescent




first quarter




waxing gibbous




full moon



waning gibbous



last quarter



waning crescent

2) Label the phases of the moon for each day on the calendar.

May 2016						
Sunday	Monday	Tuesday	Wednesday	Thursday	Friday	Saturday
1	2	3	4	5	6	7
8	9	10	11	12	13	14
15	16	17	18	19	20	21
22	23	24	25	26	27	28
29	30	31				

On what date is the full moon?

On what date is the new moon?

On what date is the first quarter moon?

On what date is the third quarter moon?

How many days have waning crescent moons?
