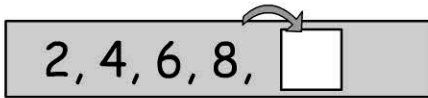



Name:

1. The next number in the pattern.

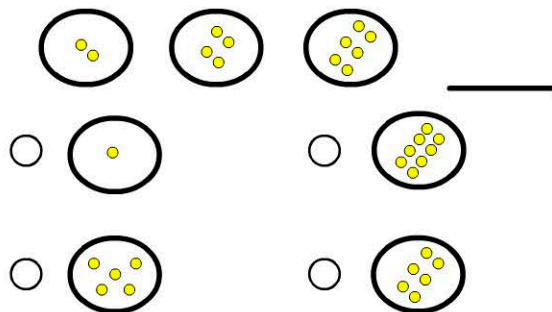


- 8
- 9
- 10
- 11

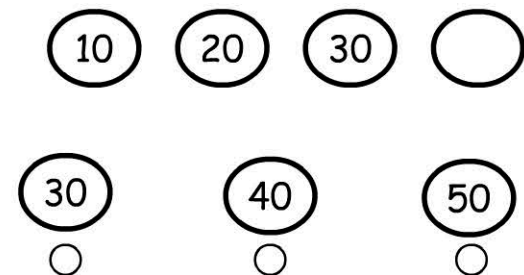
2. Which number is missing from the pattern?



3. What's the next part of the pattern?



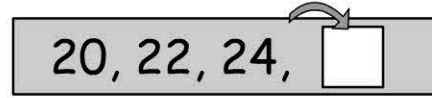
4. The next number in the pattern?



5. 10, 9, 8, 7,

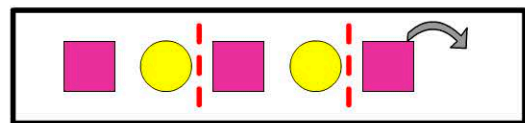
- 11
- 6
- 4
- 0

6. The next number in the pattern.



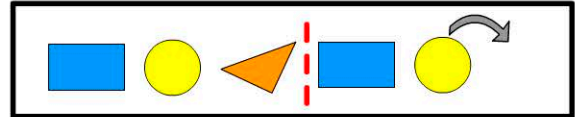
- 25
- 26
- 27
- 28

7. The next shape in the pattern.



-
-

8. The next shape in the pattern.



-
-

9. The next number is:

10, 8, 6, 4,

10. The next number is:

30, 25, 20, 15,