


- 1 26 equal beams laid end to end have a total length of 936 cm. What is the length of each beam?

26 beams →



A: 36

- 3 SL transport bought 87 identical drums, filled with oil, for their fleet of trucks. The total amount of oil purchased equals 4959 L. How much oil in each drum?



A: 57

- 5 Ted bought a car for \$2912, which he must repay in weekly instalments over 1 year (52 weeks). How much is each weekly instalment?



A: 56

- 7 Alfred earned \$2346 for working 51 hours. If he earns the same amount each hour, what is his hourly rate?



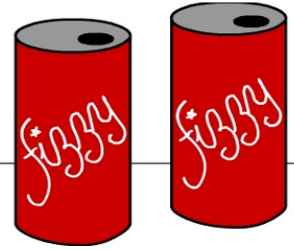
A: 46

- 9 Joe bought 42 green, striped shirts for his store. The shirts cost a total of \$1512. What is the cost of each shirts?



A: 36

- 2 2496 cans of fizzy drink were produced and packaged into 96 identical boxes. How many cans in each box?



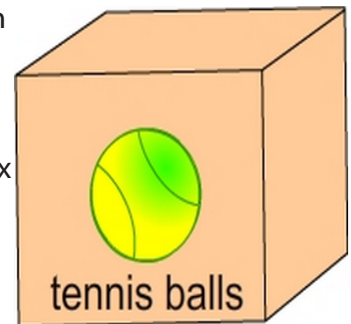
A: 26

- 4 62 books used 2666 pieces of paper to produce. How many pieces of paper to produce each book?



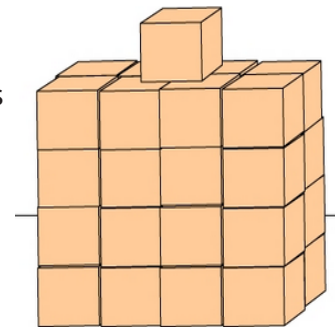
A: 43

- 6 There are 1296 balls in 27 boxes. If each box contains the same number of balls, how many balls in each box?



A: 48

- 8 The combined weight of 33 identical boxed items is 1485 kg. What's the weight of each boxed item?



A: 45

- 10 53 carriages carried a total load of 3657 t of coal. What is the average load of each carriage. (Divide the total weight by the number of carriages)



A: 69