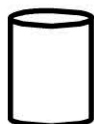


Name: _____


Date: _____

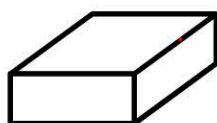
Naming 3 Dimensional Objects

Name these objects

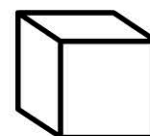












cone, rectangular prism, cube, cylinder,
triangular prism, sphere

Addition

$5 + 5 =$

$4 + 9 =$

$8 + 6 =$

$9 + 7 =$

$10 + 7 =$

$$\begin{array}{r} 37 \\ + 52 \\ \hline \end{array}$$

$$\begin{array}{r} 22 \\ + 36 \\ \hline \end{array}$$

$$\begin{array}{r} 66 \\ + 24 \\ \hline \end{array}$$

$$\begin{array}{r} 39 \\ + 89 \\ \hline \end{array}$$

$$\begin{array}{r} 97 \\ + 88 \\ \hline \end{array}$$

3 Dimensional objects

Draw a line from each 3D object to the shapes that make it.

