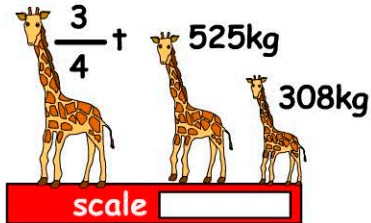


# Mass

Name:

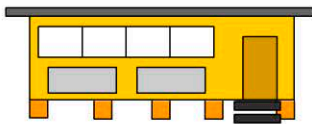
Date:

1. What's the reading on the scale?



- 1.25t       1308kg  
 1.5t       1583kg

2. What's the weight of the building in tonnes?



weight: 7t & 456kg

weight =  tonnes

3. Jacob weighs 56kg. Jemma is 6200 grams heavier. What's Jemma's weight?


- 62kg       56.2kg  
 62.2kg       118kg

4. The weight of the horse and jockey is:



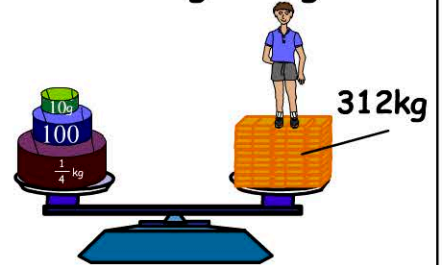
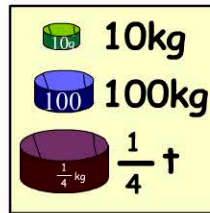
- 0.07t  
 73500g  
 0.735t  
 7.35t

5. Which animal is being weighed?




- A whale  
 A giraffe  
 An elephant  
 An emu

6. How much does George weigh?



- 48kg       52kg  
 50kg       54kg

7. What's the cost of  $3\frac{1}{2}$  kilograms of cheese?



\$12.80kg

- \$12.80  
 \$25.60  
 \$38.40  
 \$44.80

8. How many 20 gram disks are needed to balance the scale?



- 50  
 100  
 105  
 110

9. An airplane weighs 368459kg. How many tonnes is this?

t

10. 4.78t =  kg