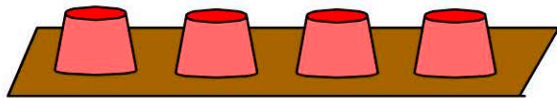
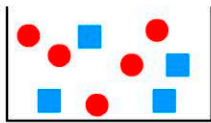


Name:



1. The chance of correctly picking the cup that's covering a ball?

- 1 in 3 4 in 4
 1 in 4 1 in 2



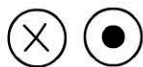
2. The chance of choosing a square tile is 4 out of

3. There were 1000 raffle tickets sold. What is the chance of winning if you have a single ticket?

- likely unlikely
 impossible certain

4. Josey tossed a coin 10 times.

Both sides of the coin.




The chance of landing 10 crosses is:

- unlikely certain
 impossible likely

5. The chance of a school excursion to the moon is:

- unlikely certain
 impossible likely



There are 4 red and 4 greens sticks.

6. What are the chances of choosing a red stick?


- 0 in 8 2 in 8
 1 in 8 4 in 8

7. If it rained in Goldtown today, what is the chance it will rain tomorrow?

- unlikely impossible
 possibly definitely

8. There are 30 students in a class. What is the chance they all have green eyes?

- impossible highly unlikely
 likely most probably



There are 2 red marbles and 7 green marbles in the bag.

9. What's the chance of picking a red marble from the bag?

in 9

10. What's the chance of picking a green marble from the bag?

in 9