


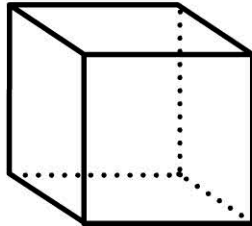

# 3D Space

Name: \_\_\_\_\_

Naming geometrical 3D objects.

Name these 3D objects.

Write a list of things which are shaped like these objects.

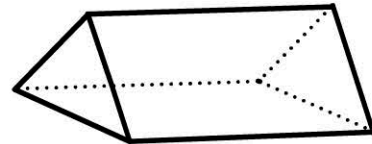
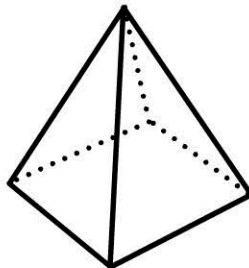
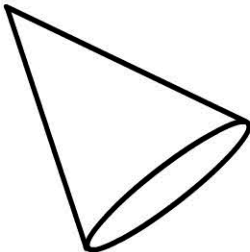


This is a

This is a

This is a

telephone book  
shoe box



This is a

This is a

This is a

triangular prism, cone, cylinder, rectangular prism, cube, square pyramid