


Name:

Date:

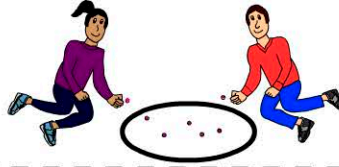
①



There were 8 camels standing on a hill. 3 camels walked away. How many camels left on the hill?

②

Rita had 19 marbles. She then gave 8 marbles to Tony. How many marbles does Rita have left?



③



There are 18 students present in class 6T. 14 left early for sport. How many children left in the room?

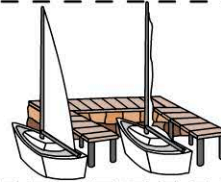
④

Jemma had 32 coins. After spending 20 coins on a football, how many coins does she have left?



⑤

There were 83 yachts moored at the marina. After 30 sailed away, how many yachts left at the marina?



⑥



A chicken found 49 seeds on the ground. It ate 32 seeds then walked away. He many seeds left on the ground?

⑦



Greg collected 95 cards



James collected 42 cards

How many more cards than James did Greg collect?

⑧

I had 98 cards in my left pocket and 61 cards in my right pocket. How many more cards do I have in my left pocket?



⑨

Alexa's Dress Shop sold 45 dresses during the sale. If she started with 90 dresses, how many dresses does she have left?



⑩



Lottie has 64 shells. She needs 79 shells. How many more shells does she need?