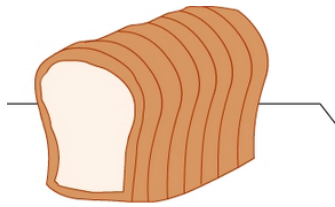


Multiplication facts - 7's

- 1 There are 7 slices of bread in each loaf. How many slices in 3 loaves?




A:

- 3 Mara bought nine 7 L containers of oil for her restaurant. How much oil did she buy? ___ L



A:

- 5 There are 7 people on each yacht in a race. If 7 yachts are competing, what is the total number of people in the race?



A:

- 7 For a project all the students in grade 4 are divided into groups of 7. There are 5 groups of girls and 3 groups of boys. How many students in grade 4?



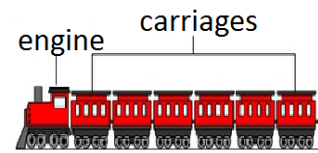
A:

- 9 Rosa made 9 bottles of pasta sauce. She uses 7 tomatoes for each bottle of sauce. How many tomatoes does she use?




A:

- 2 There are 3 people in the engine and 7 in each of the carriages. How many people on the train altogether?



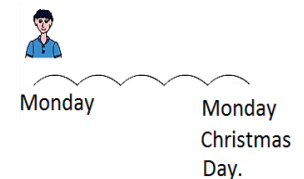
A:

- 4 Tina is 5 times older than Jemma. Toby is 9 times older than Jemma. How old is Toby?



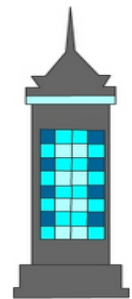
A:

- 6 Mario calculated that there are exactly 5 weeks until Christmas. How many days until Christmas?



A:

- 8 The 8 level building has 7 windows on each level - and no other windows. If all the windows need replacing, how many windows need to be replaced?



A:

- 10 Each team has 12 players. The coach bought each player a hat. There are 7 teams. How many hats did he buy?



A: