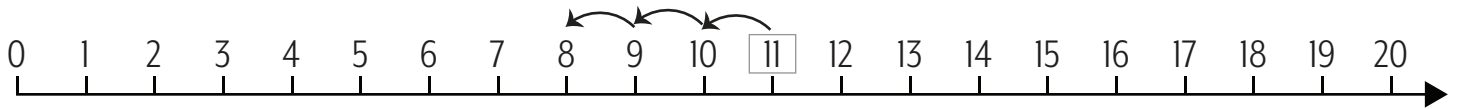


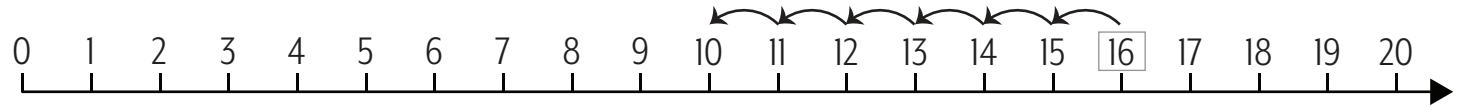
Name: _____

Subtraction - Counting back using a number line

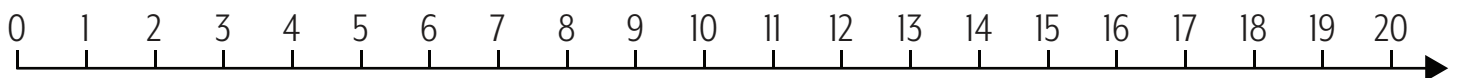
Three less than eleven is eight.



Six less than sixteen is ten.



Use the number line to help you take numbers away.



What is three less than nine? _____

What is six less than nineteen? _____

What is seven less than twelve? _____

What is eight less than sixteen? _____

14 takeaway 4 = _____

13 takeaway 8 = _____

12 takeaway 6 = _____

17 takeaway 12 = _____

20 takeaway 9 = _____

18 takeaway 9 = _____

18 takeaway 5 = _____

20 takeaway 14 = _____

