








Name:


	A	B	C	D	E	F	G	H	I
1									
2									
3									
4									

1. Which shape is at F2?

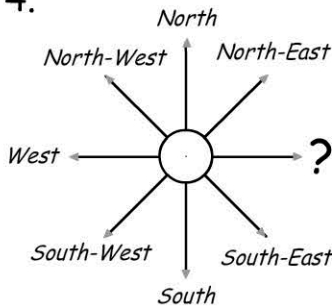


2. How many shapes in column H?

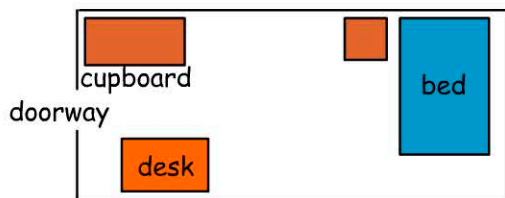
3. Which two shapes are in row 4?



4. The missing point on the compass is:

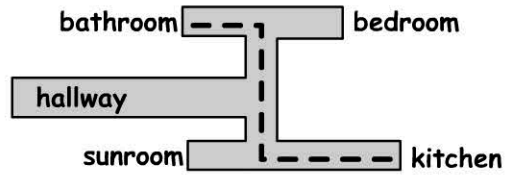


- North  
 East  
 South  
 West



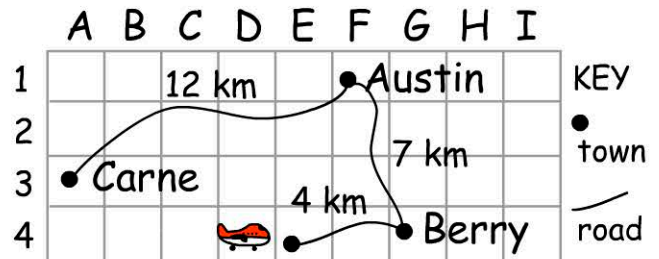
5. As you walk into the room the cupboard is to your:

- left                       back  
 right                       front



6. To get from the bathroom to the kitchen you would turn:

- right/right             right/left  
 left/right               left/left



7. Which town is located at G4?

- Carne                       Berry  
 Austin                       Airport

8. Which town is in a northerly direction from Berry?

- Carne                       Berry  
 Austin                       Airport

9. Distance, by road, from Carne to Austin.  km

10. Distance, by road, from Carne to the airport ()  km