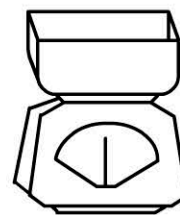


Name: \_\_\_\_\_


## Mass

### GRAMS



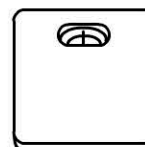
Measure the mass of objects using a set of scales.

Draw a picture of each item and record its weight in grams.

 800g	_____ g	_____ g	_____ g	_____ g
---	---------	---------	---------	---------

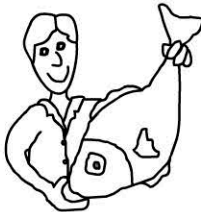
I used a \_\_\_\_\_ to measure these objects.

### KILOGRAMS



Measure the mass of objects using a set of scales.

Draw a picture of each item and record its weight in kilograms.

 15kg	_____ kg	_____ kg	_____ kg	_____ kg
---	----------	----------	----------	----------

I used a \_\_\_\_\_ to measure these objects.