
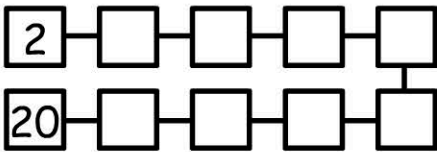


# Groups of 2

How many dots are there? \_\_\_\_\_



Count in 2's.



6 groups of 2 = \_\_\_\_\_

3 groups of 2 = \_\_\_\_\_

4 groups of 2 = \_\_\_\_\_

1 group of 2 = \_\_\_\_\_

8 groups of 2 = \_\_\_\_\_

2 groups of 2 = \_\_\_\_\_

9 groups of 2 = \_\_\_\_\_


7 groups of 2 = \_\_\_\_\_

10 groups of 2 = \_\_\_\_\_

5 groups of 2 = \_\_\_\_\_

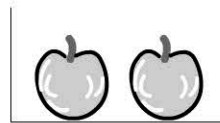
## Working Mathematically

1)



6 emus each lay 2 eggs. How many eggs altogether? \_\_\_\_\_

2)

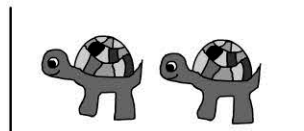


Each box has 2 apples. How many apples in 10 boxes? \_\_\_\_\_

3) \_\_\_\_\_ groups of 2 = 6

4) \_\_\_\_\_ groups of 2 = 10

5)



Each cage has 2 turtles. How many turtles in 7 cages?

- 10 turtles
- 14 turtles
- 18 turtles
- 20 turtles