

Area

Name: _____

Measure the length and the width of these regular shapes then calculate the area.

Area = length X width.

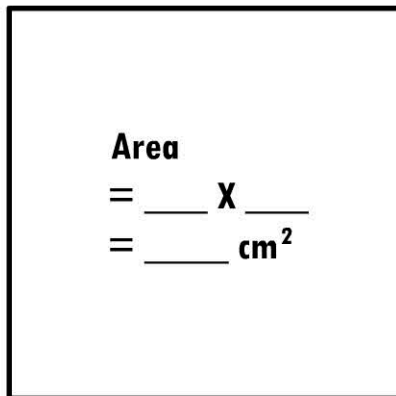
Area = ___ X ___
= ___ cm²

Area
= ___ X ___
= ___ cm²

Area
= ___ X ___
= ___ cm²

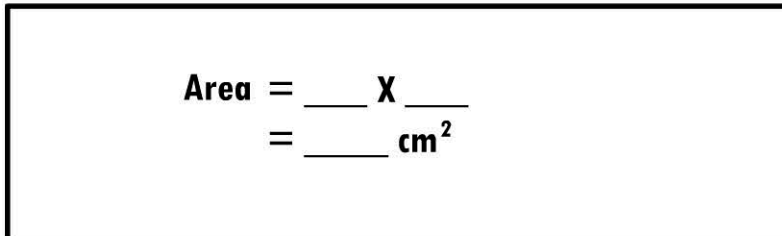


Area
= ___ X ___
= ___ cm²



Area
= ___ X ___
= ___ cm²

Area
= ___ X ___
= ___ cm²

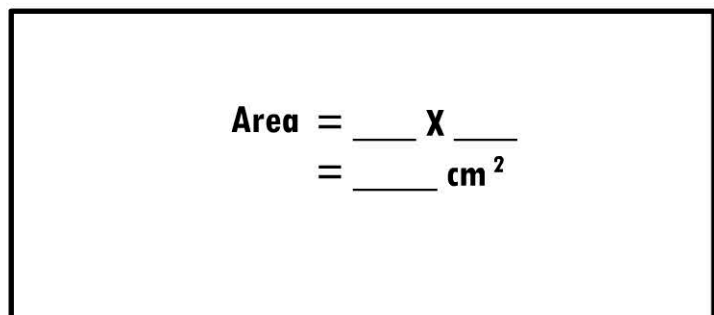


Area = ___ X ___
= ___ cm²

Area
= ___ X ___
= ___ cm²



Area
= ___ X ___
= ___ cm²



Area = ___ X ___
= ___ cm²

Area

= ___ X ___
= ___ cm²

Area = ___ X ___ = ___ cm²