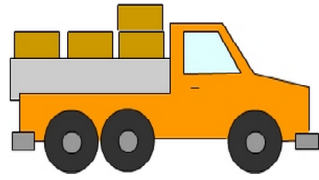


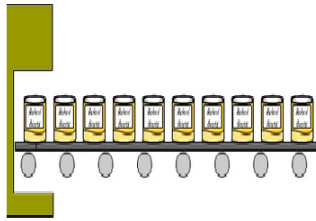
Division - multiples of 10 by a single digit number

- 1 Harry is transporting 4 boxes, each weighing the same amount. The total weight of the the 4 boxes is 180 kg. How much does each box weigh?




A:

- 3 The machine produces the same number of tins of beans each minute. If 480 cans are produced every 6 minutes, how many cans are produced per minute?



A:

- 5 There are 70 balls in each box. If there are 280 balls in total, how many boxes are there?




A:

- 7 360 pens are shared equally between 6 classes. How many pens does each class receive?




A:

- 9 The total seating capacity of 9 buses is 270. What is the seating capacity of each bus?



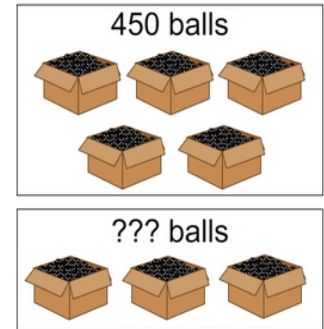
A:

- 2 Rob completed 7 laps of the course riding a total of 490 km. After completing only 2 laps, how far had he ridden?



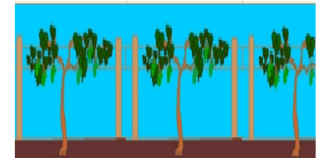
A:

- 4 Each box shown contains the same number of balls. There are 450 balls in total in the top 5 boxes. How many balls in total in the bottom 3 boxes?



A:

- 6 A vineyard contains 10 rows of vines, each with the same number of vines. If there are 820 vines, how many vines in each row?



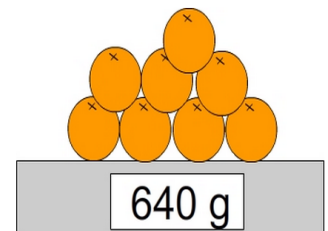
A:

- 8 Mr's Smith's class raised \$420. If the money is to be shared equally between 7 charities, how much will each charity receive?



A:

- 10 The weight of 8 oranges is 640 g. The weight of each orange is closest to _____?



A: