

# Mass



Name:

Date:

1. How many grams in one kilogram?

- 10                       1000  
 100                       10000

2. There are  grams in half a kilogram.

 = 185 grams       = 200 grams  
 = 260 grams       = 250 grams

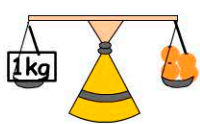
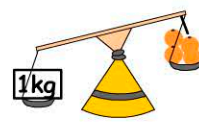

3. Which is the heaviest fruit?

- apple                       pear  
 orange                       banana

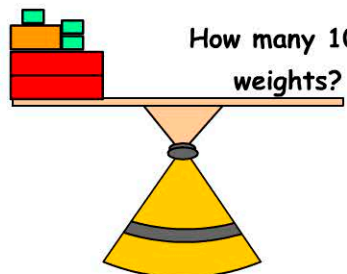
4. Four \_\_\_\_\_ equal to one kilogram (1kg)?

- apples                       pears  
 oranges                       bananas

5. What would happen to the equal arm balance arm if there were 4 oranges on one side and a one kilogram weight on the other?

              
 A                       B                       C

How many 100g weights?




1000 g  
 500 g  
 100 g

6. How many 100g weights are needed to balance the scale?

- 28                       26  
 27                       6

7 bananas weighing 1750g.



7. How many more bananas are needed to balance the scale?

- 1                       3  
 2                       4

8. Grams in  $3\frac{1}{2}$  kg?

- 3500                       350  
 3250                       35

9.  $\frac{1}{4}$  of a kilogram  grams

10.  $3\frac{3}{4}$  of a kilogram  grams