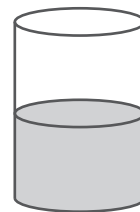
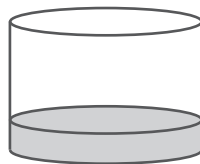
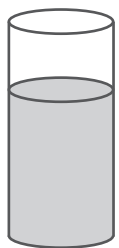


Name: _____

1) Which container is half-filled with water?






2) Colour one half of this shape.



3) There are ten sheep. Circle half the sheep.



4) Which cake has one-quarter missing?

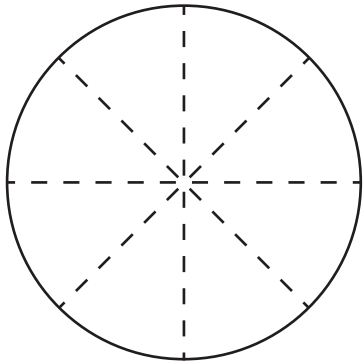


5) There are eight puppies. One-quarter of the puppies are female. How many female puppies are there? _____

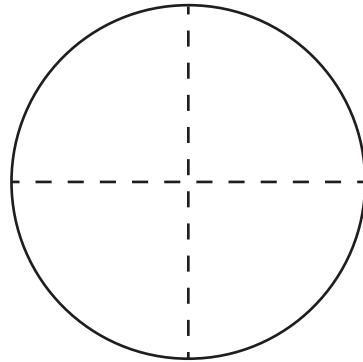


Name: _____

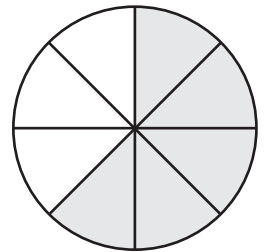
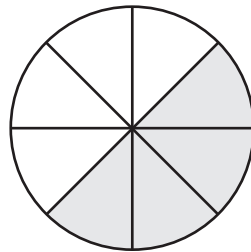
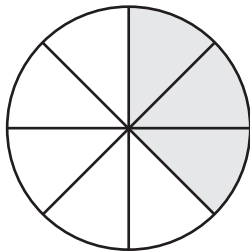
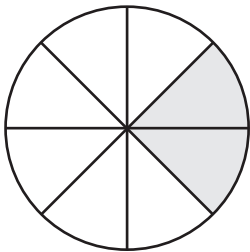
6) Colour one-eighth of this shape.



7) Colour three-quarters of this shape.




8) Which shape has three-eighths shaded grey?



9) Half the balls are outside the box. How many balls are there altogether?



10) Sam cut some pizzas into quarters.
He put all the quarters on a tray.



How many whole pizzas did Sam cut? _____