

Two digit addition I

- 1 27 passengers sat on the lower level and 42 passengers sat on the upper level of the bus. How many passengers on the bus?




A: 69

- 3 The weight of each parcel is shown. What is the combined weight of both parcels?




A: 99

- 5 Tyson and Lilli earned 55 points for their first dance and 46 points for their second dance. What is their total points for both dances?



A: 101

- 7 There are 19 books on the top shelf of the bookcase and 19 books on the bottom shelf. How many books on the bookcase?



A: 38

- 9 How old will Ron be in 27 years?



A: 71

- 2 On Friday parcels were delivered in the morning and the afternoon. How many parcels were delivered on Friday?

Parcels Delivered

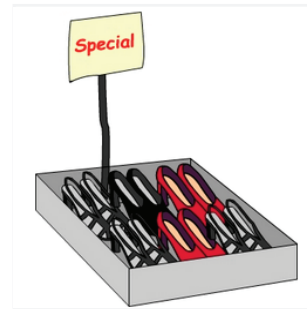


34 Friday Morning

54 Friday Afternoon

A: 88

- 4 During the sale day only red and black shoes were sold. If 70 red pairs and 28 black pairs were sold, how many pairs of shoes were sold on the day?



A: 98

- 6 How much did Maggie save in January and February combined?

Maggie's Monthly Savings

January February



\$37



\$25

A: 62

- 8 Shown is the total number of hats made for the school fete. How many blue and orange hats were made?



blue - 27



red - 72



orange - 61

A: 88

- 10 How much will it cost to buy both dresses?



\$59

\$38

A: 97