



# Multiplication facts - 9's: Activity 2

- 1 27 flowers are evenly placed in 9 bowls. How many flowers in each bowl?



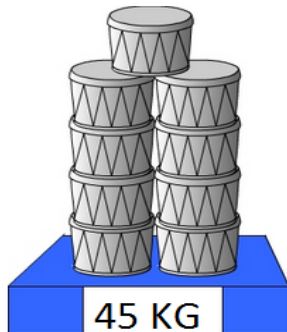
A:

- 3 The rider completed the track once each day for 9 days straight. Over 9 days he rode a total of 45 km. How long is the track?



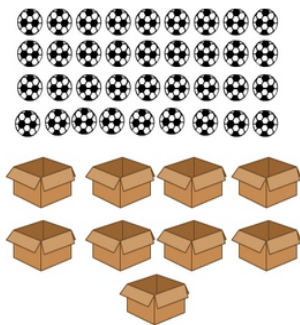
A:

- 5 The total weight of the drums are shown. What's the weight of each drum?



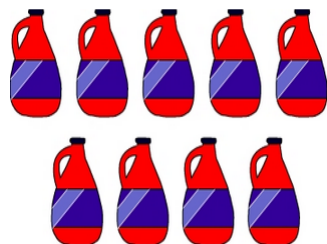
A:

- 7 Pack 36 balls evenly in 9 boxes. How many balls in each box?



A:

- 9 The total capacity of all the containers shown is 18 L. What's the capacity of each container?



A:

- 2 There are 36 chocolates in a box. Shared between 9 children, how many chocolates will each child get?



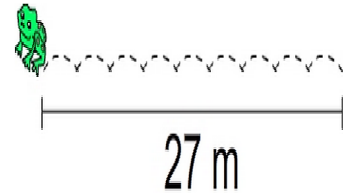
A:

- 4 There are the same number of blankets in each basket. If there are 54 blankets altogether, how many in each basket?



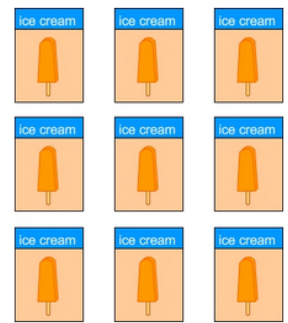
A:

- 6 Froggy completed 9 equal jumps. How far was each jump?



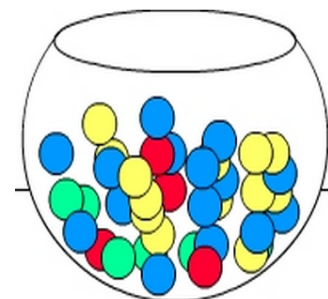
A:

- 8 There is a total of 27 ice creams in 9 boxes. How many ice creams in each box?



A:

- 10 There are 63 marbles in a bowl. If 9 children take turns picking out a marble until none are left in the bowl, how many marbles will each child have?



A: