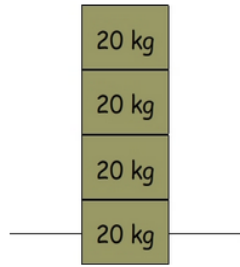


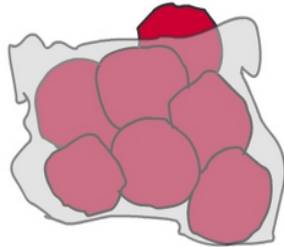
Multiply multiples of 10 by single digit numbers 1

- 1 What's the combined weight of four 20 kg blocks?



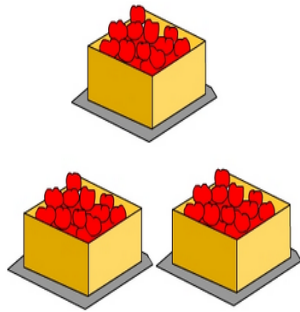
A:

- 3 To cater for a party 30 servings of strawberries are needed. If each serving has 8 strawberries, how many strawberries are needed in total?




A:

- 5 Each of the 3 crates contains 70 apples. How many apples in all 4 crates?



A:

- 7 Andy placed 50 coins each week, for 9 weeks, into his money box. How many coins did he place in his money box during the 9 weeks?



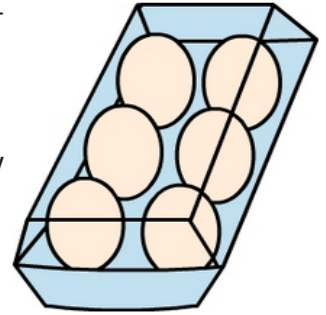
A:

- 9 The table shows the number of children from each class that went on an excursion to the zoo. How many children went to the zoo?

Excursion Roster	
Class	No.
5 R	30
5 T	30
5 H	30
6 Y	30
6 G	30
6 J	30
total	

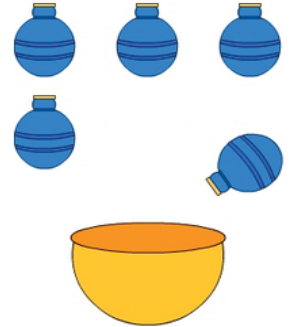
A:

- 2 The cake making association bought 70 half-dozen (6 egg) egg cartons to make cakes for the country fair. How many eggs did they buy?



A:

- 4 All the contents from five, filled, 90 mL containers are poured into an empty bowl. How much liquid is in the bowl?



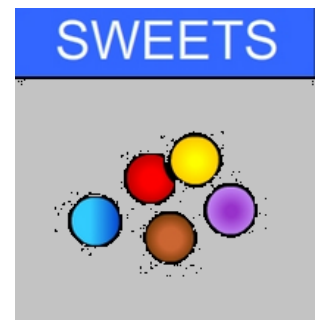
A:

- 6 Each of the children shown made 60 muffins for the school fundraiser. How many muffins did they make altogether?




A:

- 8 There are 40 sweets in each bag. How many sweets in 6 bags?



A:

- 10 90 truck loads of coal are loaded onto a coal ship. Each truck load weighs 9 t. How much coal is loaded onto the ship? ____ t.



A: