


Shapes

Name:

1.







How many circles in the picture?

- 1 3
 2 4







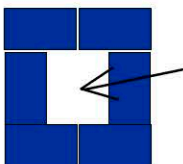
2. How many sides does the shape have?

3. Which shape is a triangle?





-  
  

4. Which is a curved line?





-  
  







5. Which shape fits the hole?

-  
  





6. Which is a straight line?

-  
  

7. Which shape has 3 sides?

-  
  

8. Which shape is a square?

-  
  

9. How many sides does a triangle have?

10. How many sides does a square have?