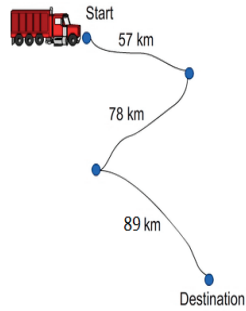



## Add three sets of numbers

- 1 The picture shows the distance a truck will travel to reach its destination.  
What is the total distance?



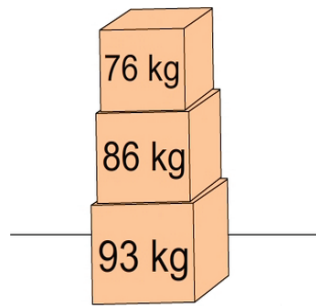
A: 89

- 3 Macy has 17 balloons. Ben has 2 more than Macy. Susie has 5 less than Ben. How many balloons do the children have altogether?



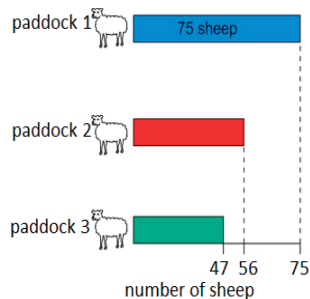
A: 50

- 5 The weight of each box is shown.  
What's the total weight of the three boxes?




A: 255

- 7 Jack drew a graph to show the number of sheep in each paddock on his farm. There are 3 paddocks on Jack's farm, how many sheep on his farm?



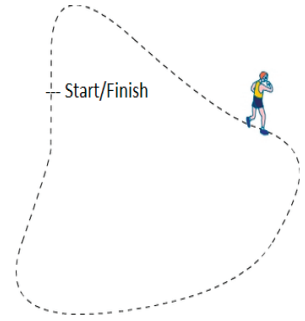
A: 178

- 9 The cost of each item is shown. How much will it cost to buy all 3 items?



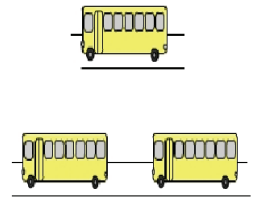
A: 102

- 2 Each competitor must complete 3 laps of the race circuit. Harry's lap times were 94 minutes, 88 minutes and 93 minutes. What was Harry's total race time?



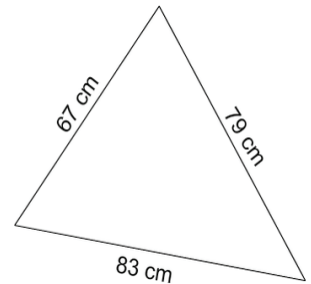
A: 275

- 4 All the students went on buses to the zoo. There were 60 students on bus 1, 69 students on bus 2 and 84 students on bus 3. How many students went to the zoo?



A: 213


- 6 To calculate the perimeter of a triangle add the length of each side.  
What is the perimeter of the triangle shown?



A: 229

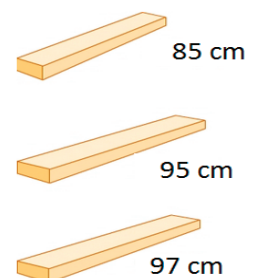
- 8 How many people went for a camel ride on Monday?

The number of people that went for a camel ride on Monday  
Morning - 27 people  
Midday - 43 people  
Afternoon - 36 people



A: 106

- 10 A piece of wood is cut into 3 lengths. The length of each is shown.  
What was the length of the original piece of wood? \_\_\_\_ cm



A: 277