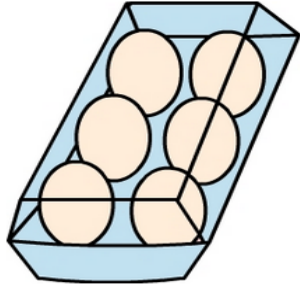


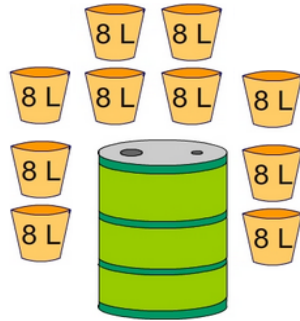
# Multiplication facts: Activity 1

- 1 There are 6 eggs in each carton. How many eggs in 7 cartons?



A:

- 3 Ten filled, 8 L buckets of water are poured into a large empty drum. How much water is in the drum?



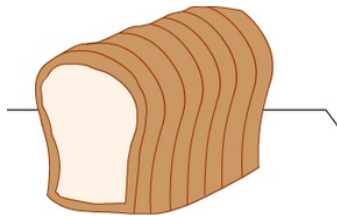
A:

- 5 Each box contains 6 cans of fizzy drink. Sama bought 4 boxes. How many cans of drink did she buy?




A:

- 7 Each of 4 loaves of bread are cut into 8 slices. How many slices altogether?




A:

- 9 Bicycles have two wheels each. How many wheels altogether do 8 bicycles have?




A:

- 2 Each crate contains 3 vases. How many vases in all 6 crates?



A:

- 4 There are 6 balls in each box. Claire bought 3 boxes and Sam bought 2 boxes. How many balls did Claire and Sam buy altogether?




A:

- 6 Mrs Jordan bought 8 pizzas for her class. She cut each pizza into 3 pieces. If every student received 2 pieces. How many students in Mrs Jordan's class?




A:

- 8 7 sandwiches are each cut into quarters. How many quarters are there?



A:

- 10 The cows walked in 7 groups of 3 as they approached the shed. How many cows altogether?



A: