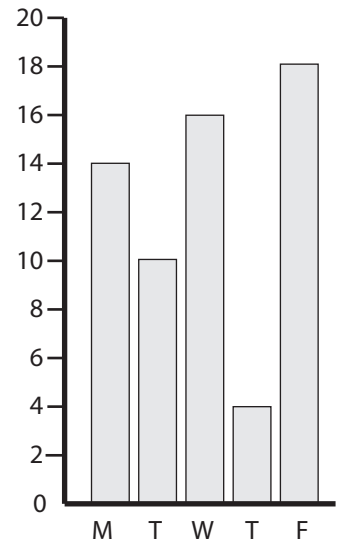
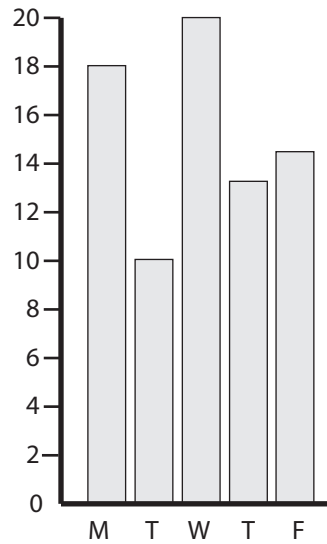
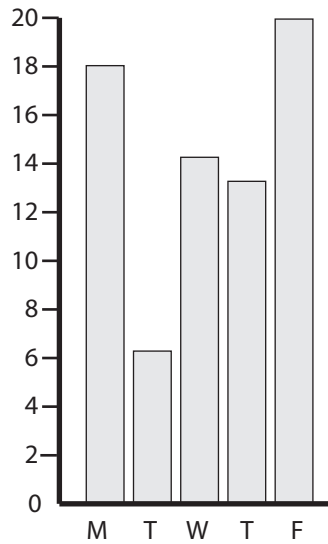
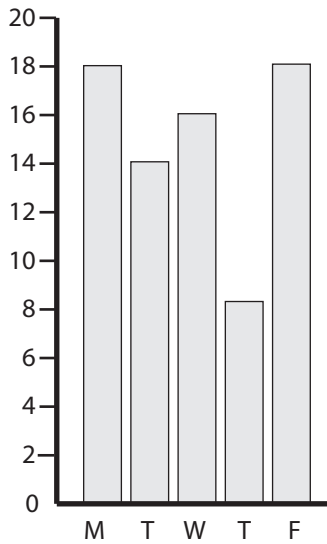


Name: _____

1) The table displays the number of cheese sandwiches sold in a school shop over one week.

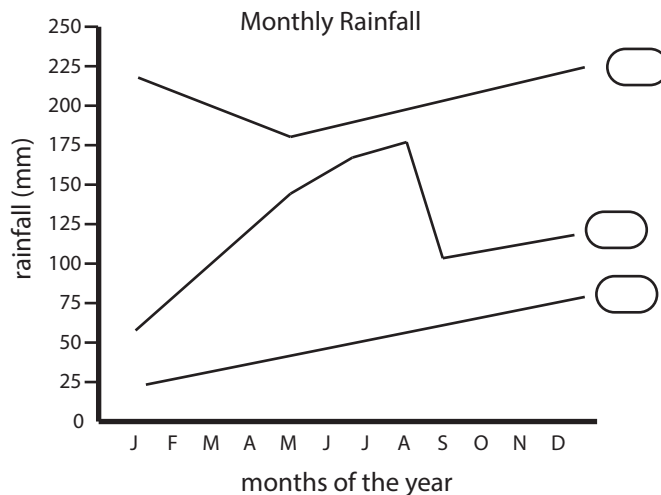
Monday	18
Tuesday	10
Wednesday	20
Thursday	13
Friday	15

a) Which graph displays the data correctly?



b) How many cheese sandwiches were sold over the week? _____

2) Which line most accurately displays the average rainfall for a city that gets the most rain in May, June, July, and August?




Name: _____

3) The table displays the number of planes that landed at a small airport from 9 a.m. to 7 p.m.

a) Display the data using a column graph.

9 am - 11 am	13
11 am - 1 pm	18
1 pm - 3 pm	11
3 pm - 5 pm	7
5 pm - 7 pm	2

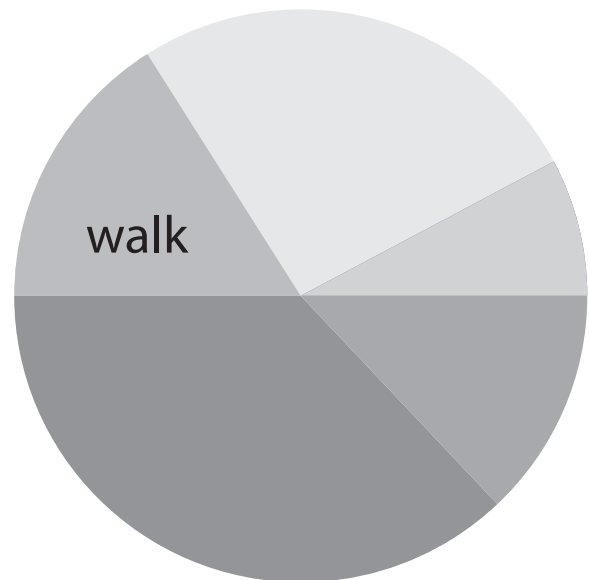


4) The table displays how students get to school each day.

a) Label each section of the graph to display the data correctly.

A section has been completed for those who walk.

walk	58
car	94
bike	28
train	35
bus	145



b) What fraction of students catch the train or bus to school?
