

## 3 x Multiplication facts


- 1 There are 5 covered plates on the table each with 3 cookies. How many cookies on the table?



A: 15

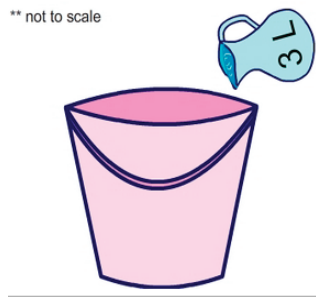
- 3 Mandy bought 5 kg of cheese at \$3.00 per kg. How much did she pay for the cheese?

\$ 3.00 per kg



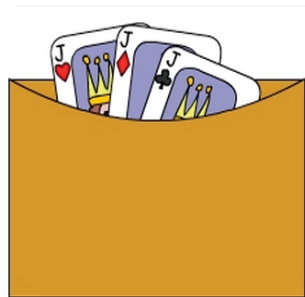
A: 15

- 5 The jug holds 3 L of water. 10 full jugs of water are poured into a large bucket. How much water is in the bucket. (\_\_\_ L)



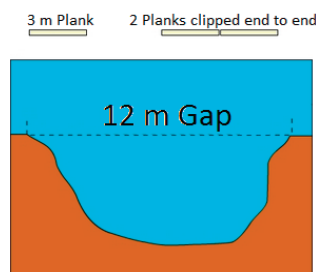
A: 30

- 7 There are 3 envelopes each with 3 cards. How many cards altogether?



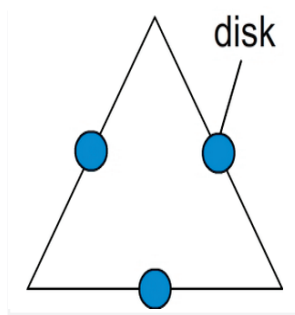
A: 9

- 9 3 mPlanks are clipped end to end to make a bridge. What is the LEAST number of planks needed to make a bridge over the gap?




A: 4

- 2 Jai drew 8 triangles. He placed a disk on each side of the 8 triangles. How many disks did he place?



A: 24

- 4 During the air show 6 groups of planes flew over the crowd. If each group had 3 planes, how many planes flew over the crowd.



A: 18

- 6 Stephan planted 7 rows of lettuce with 3 lettuce in each row. How many lettuce did he plant?



A: 21

- 8 There are 3 tents with 2 people in each. How many people altogether?



A: 6

- 10 6 pizzas are each cut into 3 pieces. How many pieces of pizza are there?



A: 18