

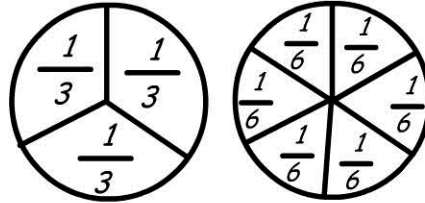
Fractions & Decimals

Name: _____



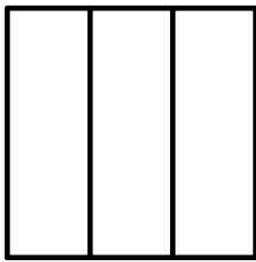
Finding equivalence between thirds and sixths.

A whole can be divided into equal parts -

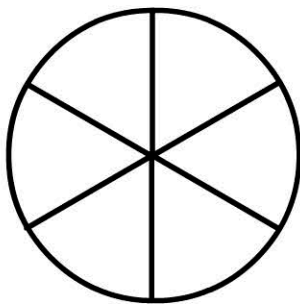


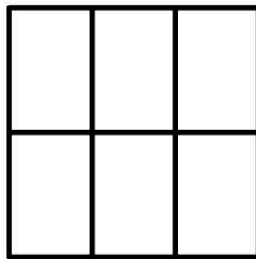
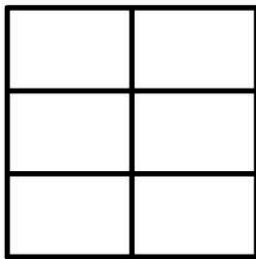
*3 thirds and
6 sixths.*



Colour one third of each of these shapes:



Colour one third of each of these squares:



1 whole is equal to _____ thirds.

1 whole is equal to _____ sixths.

_____ sixths is the same as 1 third.

_____ sixths is the same as 2 thirds.